
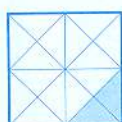
 Обчисли вирази й розфарбуй частини малюнка відповідно до відповідей-підказок.



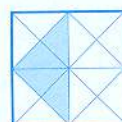
$$\begin{array}{r} + \begin{array}{|c|c|c|} \hline 1 & 3 & 4 \\ \hline 1 & 8 & 3 \\ \hline \end{array} \\ \hline \end{array}$$



$$\begin{array}{r} + \begin{array}{|c|c|c|} \hline 1 & 9 & 7 \\ \hline 3 & 4 & 2 \\ \hline \end{array} \\ \hline \end{array}$$




$$\begin{array}{r} + \begin{array}{|c|c|c|} \hline 3 & 6 & 8 \\ \hline 2 & 3 & 1 \\ \hline \end{array} \\ \hline \end{array}$$

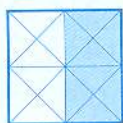


$$\begin{array}{r} + \begin{array}{|c|c|c|} \hline 6 & 5 & 8 \\ \hline 2 & 4 & 0 \\ \hline \end{array} \\ \hline \end{array}$$

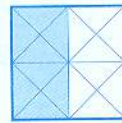
317	539	599	898
866	822	887	711
886	835	724	485
785	945	950	897




$$\begin{array}{r} + \begin{array}{|c|c|c|} \hline 5 & 2 & 2 \\ \hline 3 & 4 & 4 \\ \hline \end{array} \\ \hline \end{array}$$




$$\begin{array}{r} + \begin{array}{|c|c|c|} \hline 6 & 9 & 5 \\ \hline 1 & 2 & 7 \\ \hline \end{array} \\ \hline \end{array}$$



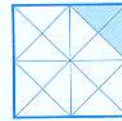
$$\begin{array}{r} + \begin{array}{|c|c|c|} \hline 4 & 1 & 8 \\ \hline 4 & 6 & 9 \\ \hline \end{array} \\ \hline \end{array}$$




$$\begin{array}{r} + \begin{array}{|c|c|c|} \hline 4 & 5 & 3 \\ \hline 2 & 5 & 8 \\ \hline \end{array} \\ \hline \end{array}$$



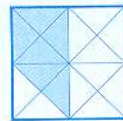
$$\begin{array}{r} + \begin{array}{|c|c|c|} \hline 7 & 1 & 2 \\ \hline 1 & 7 & 4 \\ \hline \end{array} \\ \hline \end{array}$$



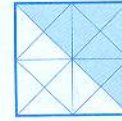
$$\begin{array}{r} + \begin{array}{|c|c|c|} \hline 6 & 2 & 7 \\ \hline 2 & 0 & 8 \\ \hline \end{array} \\ \hline \end{array}$$




$$\begin{array}{r} + \begin{array}{|c|c|c|} \hline 5 & 3 & 9 \\ \hline 1 & 8 & 5 \\ \hline \end{array} \\ \hline \end{array}$$



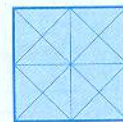
$$\begin{array}{r} + \begin{array}{|c|c|c|} \hline 1 & 5 & 6 \\ \hline 3 & 2 & 9 \\ \hline \end{array} \\ \hline \end{array}$$



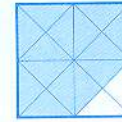
$$\begin{array}{r} + \begin{array}{|c|c|c|} \hline 2 & 6 & 8 \\ \hline 5 & 1 & 7 \\ \hline \end{array} \\ \hline \end{array}$$



$$\begin{array}{r} + \begin{array}{|c|c|c|} \hline 8 & 0 & 3 \\ \hline 1 & 4 & 2 \\ \hline \end{array} \\ \hline \end{array}$$



$$\begin{array}{r} + \begin{array}{|c|c|c|} \hline 7 & 3 & 4 \\ \hline 2 & 1 & 6 \\ \hline \end{array} \\ \hline \end{array}$$



$$\begin{array}{r} + \begin{array}{|c|c|c|} \hline 6 & 0 & 8 \\ \hline 2 & 8 & 9 \\ \hline \end{array} \\ \hline \end{array}$$



# Обчисли вирази.

$$\begin{array}{r} + 125 \\ 234 \\ \hline \square\square\square \end{array}$$

$$\begin{array}{r} + 148 \\ 162 \\ \hline \square\square\square \end{array}$$

$$\begin{array}{r} + 327 \\ 382 \\ \hline \square\square\square \end{array}$$

$$\begin{array}{r} + 532 \\ 318 \\ \hline \square\square\square \end{array}$$

$$\begin{array}{r} + 247 \\ 351 \\ \hline \square\square\square \end{array}$$

$$\begin{array}{r} + 236 \\ 175 \\ \hline \square\square\square \end{array}$$

$$\begin{array}{r} + 177 \\ 530 \\ \hline \square\square\square \end{array}$$

$$\begin{array}{r} + 438 \\ 345 \\ \hline \square\square\square \end{array}$$

$$\begin{array}{r} + 316 \\ 153 \\ \hline \square\square\square \end{array}$$

$$\begin{array}{r} + 743 \\ 207 \\ \hline \square\square\square \end{array}$$

$$\begin{array}{r} + 754 \\ 236 \\ \hline \square\square\square \end{array}$$

$$\begin{array}{r} + 624 \\ 263 \\ \hline \square\square\square \end{array}$$

$$\begin{array}{r} + 214 \\ 165 \\ \hline \square\square\square \end{array}$$

$$\begin{array}{r} + 486 \\ 373 \\ \hline \square\square\square \end{array}$$

$$\begin{array}{r} + 515 \\ 395 \\ \hline \square\square\square \end{array}$$

$$\begin{array}{r} + 178 \\ 572 \\ \hline \square\square\square \end{array}$$

$$\begin{array}{r} + 236 \\ 143 \\ \hline \square\square\square \end{array}$$

$$\begin{array}{r} + 629 \\ 181 \\ \hline \square\square\square \end{array}$$

$$\begin{array}{r} + 267 \\ 144 \\ \hline \square\square\square \end{array}$$

$$\begin{array}{r} + 705 \\ 253 \\ \hline \square\square\square \end{array}$$

$$\begin{array}{r} + 524 \\ 231 \\ \hline \square\square\square \end{array}$$

$$\begin{array}{r} + 646 \\ 233 \\ \hline \square\square\square \end{array}$$

$$\begin{array}{r} + 368 \\ 432 \\ \hline \square\square\square \end{array}$$

$$\begin{array}{r} + 820 \\ 167 \\ \hline \square\square\square \end{array}$$

$$\begin{array}{r} + 649 \\ 240 \\ \hline \square\square\square \end{array}$$

$$\begin{array}{r} + 195 \\ 345 \\ \hline \square\square\square \end{array}$$

$$\begin{array}{r} + 245 \\ 134 \\ \hline \square\square\square \end{array}$$

$$\begin{array}{r} + 392 \\ 426 \\ \hline \square\square\square \end{array}$$

$$\begin{array}{r} + 380 \\ 319 \\ \hline \square\square\square \end{array}$$

$$\begin{array}{r} + 362 \\ 198 \\ \hline \square\square\square \end{array}$$

$$\begin{array}{r} + 612 \\ 186 \\ \hline \square\square\square \end{array}$$

$$\begin{array}{r} + 407 \\ 365 \\ \hline \square\square\square \end{array}$$

$$\begin{array}{r} + 529 \\ 254 \\ \hline \square\square\square \end{array}$$

$$\begin{array}{r} + 731 \\ 259 \\ \hline \square\square\square \end{array}$$

$$\begin{array}{r} + 369 \\ 403 \\ \hline \square\square\square \end{array}$$

$$\begin{array}{r} + 536 \\ 270 \\ \hline \square\square\square \end{array}$$